

DAISY CENTRE AND SCHOOL

DIGITAL MONITORING PROGRAMME.

GRADE 2 HYGIENE AND NUTRITION ASSIGNMENT 10, JULY 10TH 2020

TASTES OF FOOD

.Foods have different tastes.

.They may taste bitter, sour, sweet or salty

.Many fruits are sweet when ripe

.Some fruits such as lemons are sour

When salt is added to food. It makes the food salty

.Vegetables such as managu are bitter

Exercise:

1. A lemon has a _____ taste. (Sour/bitter)
2. A ripe banana has a _____ taste. (Bitter/sweet)
3. An onion has a _____ taste.
4. Meat has a _____ taste (bitter/salty)

DAISY CENTRE AND SCHOOL

DIGITAL MONITORING PROGRAMME.

GRADE 2 C.R.E ASSIGNMENT 10, JULY 10TH 2020

Creation

Self awareness

Revision

1. _____ is our creator.(God, Father)
2. He created man in His own _____ and likeness (image, picture)
3. I am God's _____ creation. (Special, best)
4. I will use my body to _____ (steal, worship God)

DAISY CENTRE AND SCHOOL,

GREDI YA 2 KISWAHILI KAZI YA ZIADA YA 10 TAREHE: 10 JULAI 2020

Kanusha

Mfano:

Nilicheza – sikucheza

Nilinunua – sikununua

Alisoma – hakusoma

Alikata – hakukata

Kanusha maneno haya

1. Nilipika - _____
2. Niliandika - _____
3. Nilisoma - _____
4. Alicheza - _____
5. Alifika - _____
6. Aliandika - _____
7. Nilifunza - _____
8. Nilisafisha - _____

DAISY CENTRE AND SCHOOL

DIGITAL MONITORING PROGRAMME.

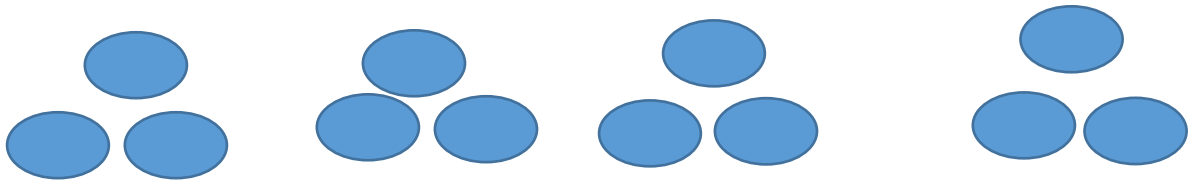
GRADE 2 MATHEMATICS ASSIGNMENT 10, JULY 10TH 2020

Multiplication

Multiplication as repeated addition

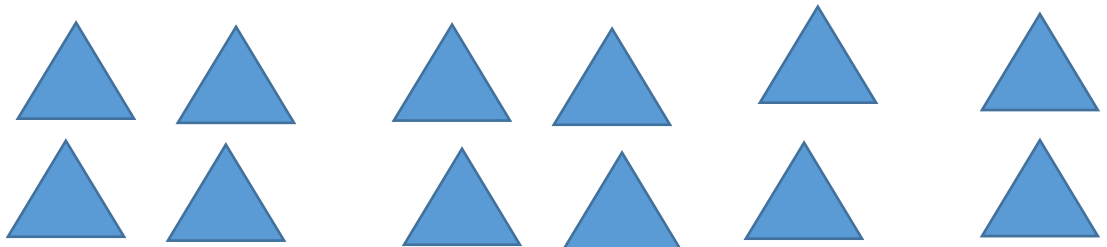
Count each group and writ the sum.

1.



- a. How many group of 3?
- b. What is the sum?

2.



How many groups of 4?

What is the sum?




3.



- a. How many groups of 3?

b. What is the sum?

4.



a. How many groups of 5?

b. What is the sum?

DAISY CENTRE AND SCHOOL

DIGITAL MONITORING PROGRAMME.

GRADE 2 ENGLISH ASSIGNMENT 10, JULY 10TH 2020

Read the sound.

\$m

Read the words

\$moke

\$mile

\$mart

\$mash

\$mall

\$mack

\$mooth

\$mell

Say these sentences as fast as you can

The **\$mall** rat was **\$melly**.

The **\$mart** girl **\$macked** the pillow and **\$miled**.

Use of a or an

I bought an apple and a mango.

I saw an ant and a butterfly.

Exercise

Fill the blanks with a or an.

1. He is eating _____ egg and _____ banana.
2. We saw _____ hippo and _____ elephant yesterday.
3. May I have _____ avocado and _____ tomato, please?

DAISY CENTRE AND SCHOOL

DIGITAL MONITORING PROGRAMME.

GRADE 2 ENVIRONMENTAL ASSIGNMENT 10, JULY 10TH 2020

REVISION EXERCISE

1. Draw the following weather symbols.

Rainy	
Windy	
Cloud	
Sunny	

2. Name 4 sources of water.

a..... b c..... d.....

3. Name 3 ways of storing water.

a.....b.....c.....

4. Which source of light do we use at night?



A



B

5. Playing with electrical socket is..... (Dangerous, interesting).
6. We should not play with..... (Toys, matchstick).
7. We cannot see the in the sky at night. (moon, sun).
8. Match the animals with the sound correctly.

Cow	Roars
Cock	Meows
Lion	Trumpets
Cat	Moos
Elephant	Crows

9. Which animal produces light? (Ant, glow worm).
10. Name the parts of a plant below

